

KENDRIYA VIDYALAYA, YOL CANTT.

WORKSHEET – E.V.S.

CLASS:II ____

TOPIC : HEALTH & HYGIENE

ROLL NO.: ____

NAME: _____

DATE: _____

- I. Put a tick (✓) against the clean habits one should follow to maintain one's health and a cross (X) against the those that we should avoid. Also write the name of activity shown in the picture.**





KENDRIYA VIDYALAYA, YOL CANTT.

WORKSHEET – E.V.S.

CLASS:II ____

TOPIC : FESTIVALS

ROLL NO.: ____

NAME:_____

DATE:_____

I. Match the festivals with the correct image.




HOLI



DIWALI



CHRISTMAS



EID

II. Fill in the blanks.

- a) _____ is the festival of colours.
- b) _____ is a festival to celebrate the birth of Jesus Christ
- c) _____ is the festival of lights.
- d) On _____, we greet each other and eat sewaiya.
- e) _____ is celebrated to celebrate the birth of Lord Krishna.
- f) On _____ people visit Gurudwara.
- g) On the last day of _____ festival we burn effigies.
- h) _____, _____ and _____ are called as National Festivals of India.

III. Name and describe your favourite festival in a paragraph. Draw a picture of it also.

KENDRIYA VIDYALAYA, YOL CANTT.

WORKSHEET – E.V.S.

CLASS:II ____

TOPIC : PLACES OF WORSHIP

ROLL NO.: ____

NAME: _____

DATE: _____

I. Fill in the following table.

RELIGION	HOLY BOOK	PLACE OF WORSHIP
Sikh	Guru Granth Sahib	
Christian		Church
Muslim	Quran	
Hindu		Temple

II. Name the following:



a)



b)



c)



d)

KENDRIYA VIDYALAYA, YOL CANTT.

WORKSHEET – E.V.S.

CLASS:II ____


TOPIC : OUR HELPERS

ROLL NO.: ____

NAME: _____

DATE: _____

I. Draw the tools used by our helpers. Also write what do they do.

<p>a) Doctor</p>  <p><u>Doctor treats patients.</u></p>	<p>b) Tailor</p> <hr/>
<p>c) Farmer</p> <hr/>	<p>d) Carpenter</p> <hr/>
<p>e) Firefighter</p> <hr/>	<p>f) Plumber</p> <hr/>
<p>g) Potter</p> <hr/>	<p>h) Teacher</p> <hr/>

II. Match the occupations with their place of work.

a) Postman



b) Banker



c) Nurse



d) Farmer



e) Tailor



f) Teacher



g) Chemist



h) Police man



i) Waiter



j) Florist



k) Fire fighter



KENDRIYA VIDYALAYA, YOL CANTT.

WORKSHEET – E.V.S.

CLASS:II ____

TOPIC : MEANS OF TRANSPORT

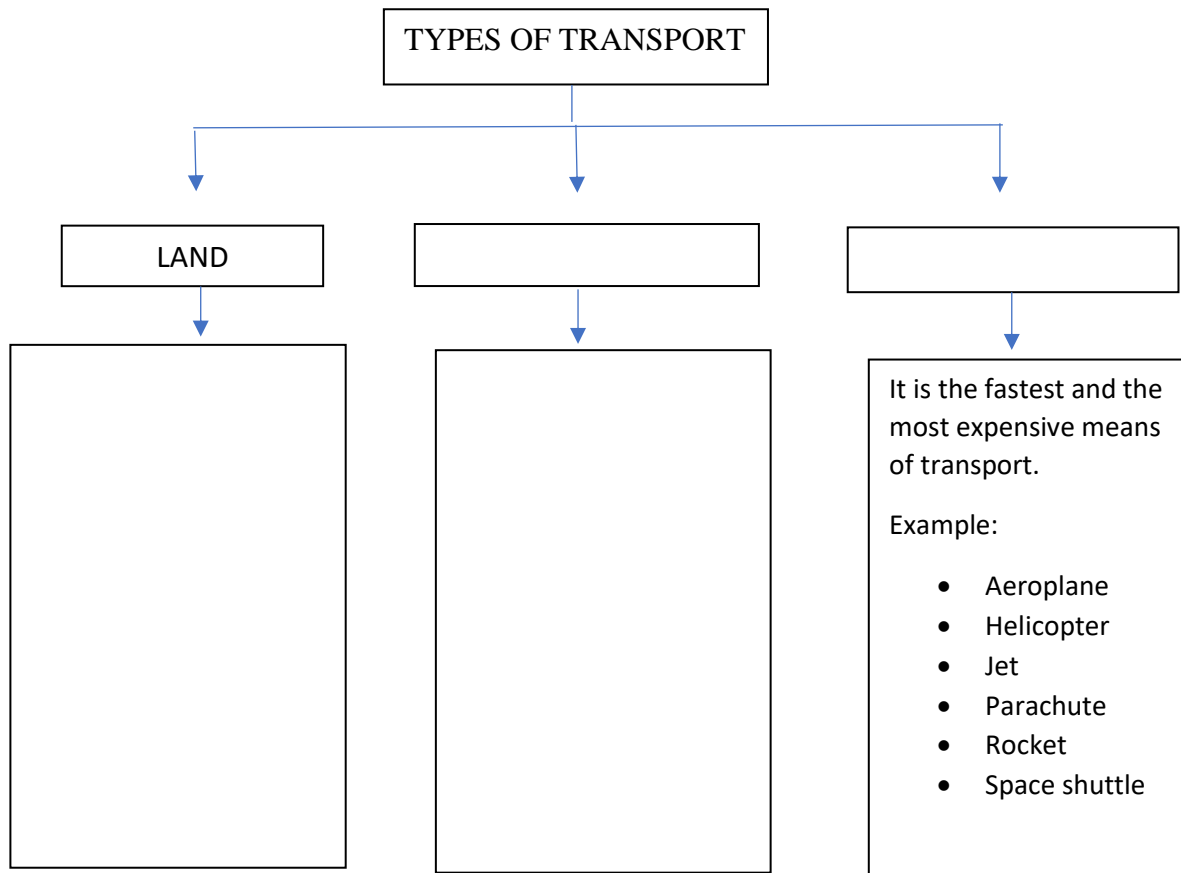
ROLL NO.: ____

NAME: _____

DATE: _____

I.

I. Fill in the given chart on types of transport.



II. Name them:

a) Two transports that run by man power.

Ans.

b) Two transports that run by animals.

Ans.

c) Two land transports with two wheels.

Ans.

d) Two land transports with four wheels.

Ans.

III. There are six means of transport hidden in the grid. Find out and write their names in the space given below.

S	T	R	U	C	K
B	U	S	C	A	R
O	T	R	A	I	N
I	S	H	I	P	O
U	B	O	A	T	F

1. _____
2. _____
3. _____
4. _____
5. _____
6. _____

IV. Arrange the following means of transport from the slowest to the fastest.

Bus	train	bicycle	aeroplane	bullock-cart
-----	-------	---------	-----------	--------------

- a) _____
- b) _____
- c) _____
- d) _____
- e) _____

V. Fill in the blanks.

1. The fastest train in India is the _____.
2. The first plane was invented by the _____.

KENDRIYA VIDYALAYA, YOL CANTT.

WORKSHEET – E.V.S.

CLASS:II ____

TOPIC : MEANS OF COMMUNICATION

ROLL NO.: ____


NAME: _____

DATE: _____

I. Circle the slowest means of communication.



II. Circle the fastest means of communication.



III. Arrange the following in chronological order.



IV. Underline the word that doesn't belong to the group.

- 1. Telephone, telegram, letter box, radio.**
- 2. Newspaper, postcard, radio, television.**
- 3. Computer, fax, television, train.**
- 4. Postcard, inland letter, fax, stamps.**
- 5. Newspaper, letter, television.**

V. Name them.

a) Two means of communication that carry message to many people at the same time.

_____ , _____

b) Two modern means of communication.

_____ , _____

VI. Draw a letter box and colour it.

